



Date:12/06/2022
GRADE: II





CPE - 01 (2022-23)
MATHEMATICS




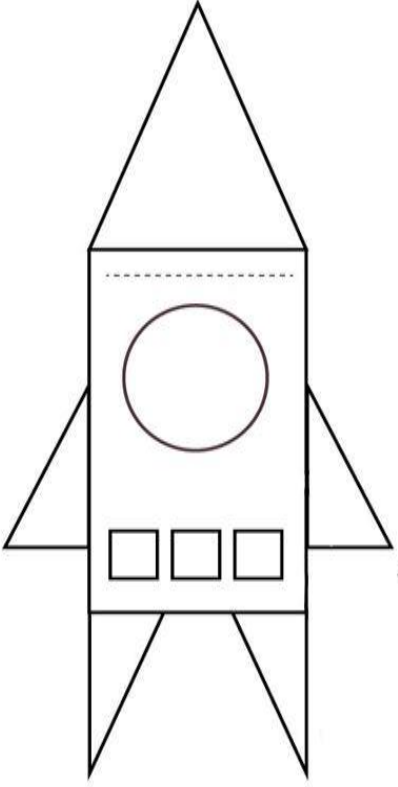
Max marks: 20
Time: 1 hour










Name : _____

General Instructions:


1. This question paper contains two parts A and B. Each part is compulsory.

Q.No.	Section A	Mark
I	Choose the correct answer from the following options.	6X1=6
1	Identify the shape.  a) Cuboid b) Cylinder c) Sphere	
2	Which of these letters have curved and straight lines? a A b) R c) Z	
3	From among the following shapes, which one is not having the vertical lines? a)  b)  c) 	

4	<p>The object which can roll and slide is _____.</p> <p>a)  b)  c) </p>	
5	<p>Choose the number which is made up of only curved lines.</p> <p>a) 5 b) 8 c) 7</p>	
6	<p>The number of faces of a cube is _____.</p> <p>a) 6 b) 4 c) 3</p> <p>II Count the number of each shape in this picture and fill in the blanks.</p> <p>a) There are _____ Squares.</p> <p>b) There are _____ Rectangles.</p> <p>c) There are _____ Triangles.</p> <p>d) There are _____ Circles.</p> 	4X1=4

I	<p style="text-align: center;">Section B</p> <p>Match the solid shapes with the correct plane shapes.</p>	4X1=4
<p>7</p>  <p>8</p>  <p>9</p>  <p>10</p> 	<p>a. </p> <p>b. </p> <p>c. </p> <p>d. </p>	
II	<p style="text-align: center;">Answer the following questions.</p>	3X2=6
<p>11</p> <p>12</p>	<p>Look carefully at these letters.</p> <p>X, R, C, D, O, Z</p> <p>a) The letters with Straight lines are _____.</p> <p>b) The letters with Straight and curved lines are _____.</p> <p>Write the name of each of these shapes in the blanks.</p> <p>a)</p>  <p style="text-align: right;">_____</p>	

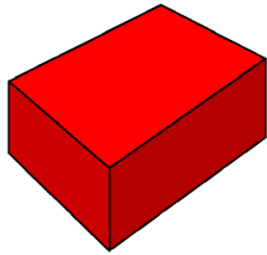
b)




13

Draw the plane shapes for these solid shapes.

a)



b)



.....